

Jasmeet

BUDHA DAL PUBLIC SCHOOL, PATIALA

Term - 2

Subject - EVS

Session - 2022-2023

Name - _____

Class - 1

Section -

Roll No - _____

Set - A

Date - 16.3.23

Time -

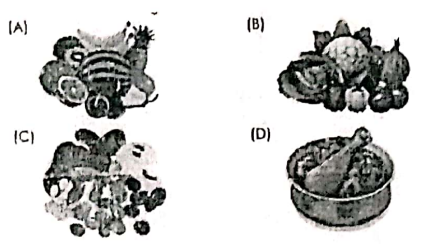
M.M. - 60

Section-A (Multiple Choice)

12 marks

Choose the correct answer :

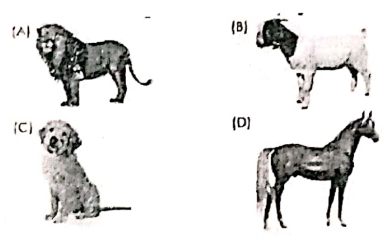
1. Which of the following is not a raw food?



2. Which of the following things was used to make the first wheel?

- a) wood (b) stone (c) clay (d) rubber

3. Which of the following animal lives in the jungle.




- a) lion (b) goat (c) dog (d) horse

4. Which of the following may NOT be found in some kinds of houses?

- a) roof (b) window (c) door (d) balcony

5. Which of the following pictures show that the weather is hot?



- a) rainy (b) windy (c) snow (d) hot sun

6. At what time of the day do we have breakfast?
a) morning (b) afternoon (c) evening (d) night

7. For which of the following purpose is this used?



- a) to boil and serve food (b) to boil and steam food
c) to fry and serve food (d) to fry food only

8. Which type of wheel is shown in the picture?



- a) turbine (b) giant wheel
c) charkha (d) water wheel

9. Which of the following sets consists of big animals?

- a) cat, lion, ant (b) tiger, rabbit, cat
c) lion, elephant, tiger (d) cat, rabbit, rat

10. Ronit wants to clean the house. Which of the following things should he **NOT** use?


- a) broom (b) threads and needle
c) gloves (d) mop

11. In which of the following seasons should we drink a lot of this?



- a) spring (b) monsoon
c) winter (d) summer

12. Which of the following should Rakhi use to serve food to her guests?



Fill in the blanks using the correct word from the brackets :

13. A _____ wheel is shown in the picture given below : (wooden / stone)



14. The animal in the picture below is a (hyena / duck)



15. We eat, _____ and sleep in our house. (fly / play)

16. Special climates that are present in different parts of a year are called _____
(seasons / months)

17. This is a picture of a _____ wheel. (stone / rubber)



18. We have lunch in the _____ . (afternoon / night)

Answer the following questions in a word or a sentence:

19. In which room of our house do we usually keep our clothes and toys?

20. Which vehicle is shown in the picture.



21. Merry lives in a house which has two bedrooms, and one drawing room. How many rooms are there in her house?

Write Yes (Y) or No (N) :

22. Early humans used wheels to make carts.

23. Fish have four legs.

24. A clean house keeps us healthy.

25. Different seasons have different climates.

26. It rains a lot during summer.

27. Plants grow new flowers and leaves in the summer season.

28. Fruits protect us from illness.

Name the following :

29. The thing which people made first using the wheel.

30. The domestic animals that live inside our houses.

31. The thing shown in the picture.





32. The weather of a place that stays for a long time.



Section – C (Graphic Organizers)

16 M

33. Choose the correct words from the brackets to complete the following table : 4 M
(day / night / bat / elephant)

Picture	Name of the animal	Type of animal
	_____	It is a _____ animal.
	_____	It is a _____ animal.

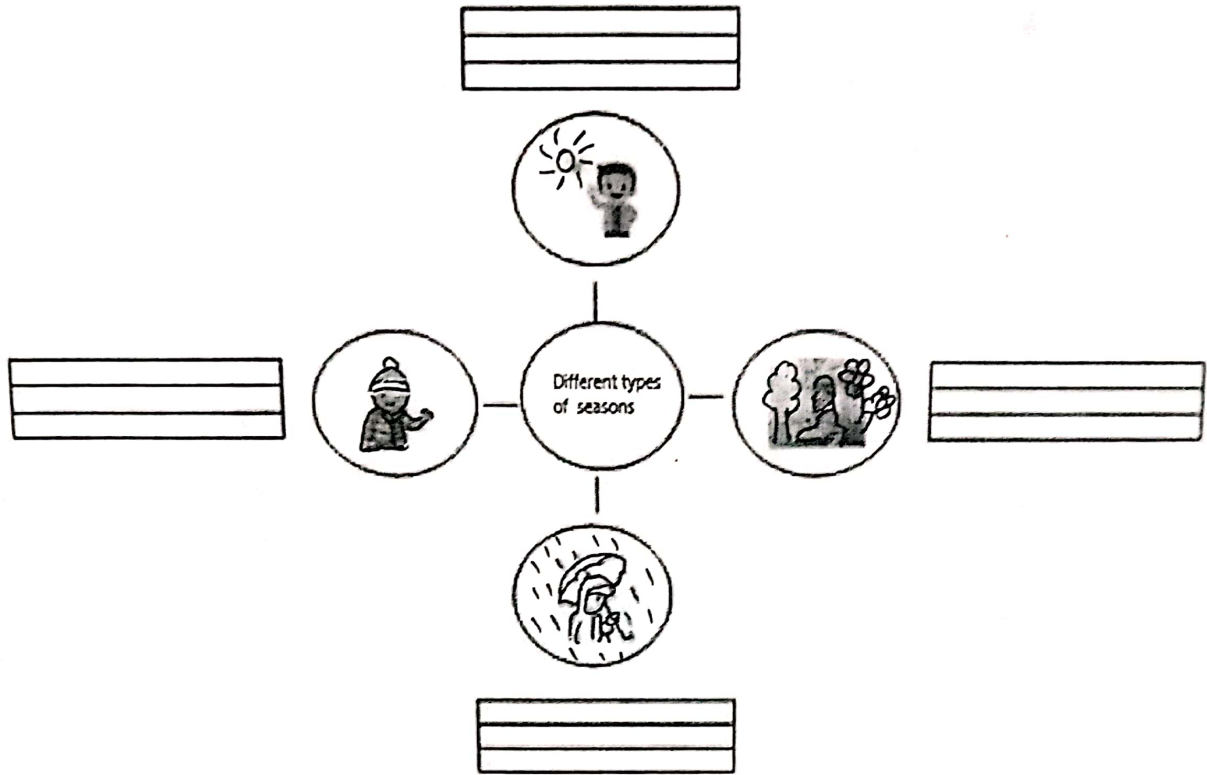
34. Choose the correct words from the brackets to complete the following table : 4 M
(bathroom / bedroom / sleep/ bath)

Rooms and their uses	
	We _____ in the _____.
	We have a _____ in the _____.

35. Choose the correct words from the brackets to complete the chart.

4 M


(Rainy / Summer / Winter / spring)



36. Choose the correct words from the brackets to complete the table.

4 M

(kills / safe / germs / eat)

Why we cook food	
 Cooked food	It _____ the _____ in the food.
	It makes food _____ to _____.

37. Which food items are shown in the given picture? Are they cooked or raw?



38. What are farm animals? Give one example.

39. What happens to the leaves of trees during the autumn season?

40. Give reasons :

We live in house because :

41. Rick saw a dog and a hyena on television. Which one of these is a wild animal and which one is a pet animal?

Section – E (Diagram based questions)

2 M

42. Draw a house and label the door and window.